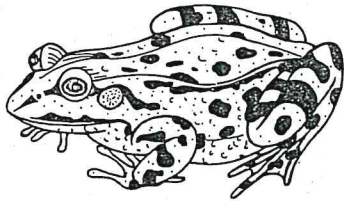
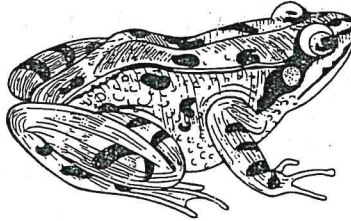


## Wir bestimmen Lurche

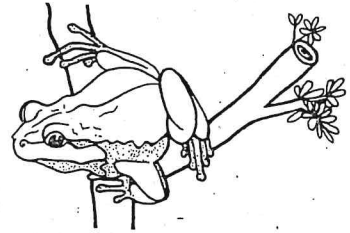
Versuche die abgebildeten Lurche zu bestimmen. Nimm einen Bestimmungsschlüssel oder eine Bestimmungstabelle zu Hilfe, evtl. auch ein Bestimmungsbuch. Setze die Namen ein.




\_\_\_\_\_



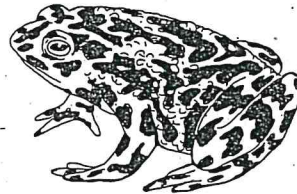
\_\_\_\_\_



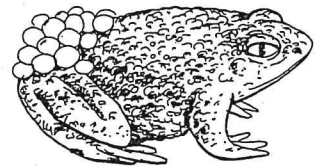
\_\_\_\_\_




\_\_\_\_\_



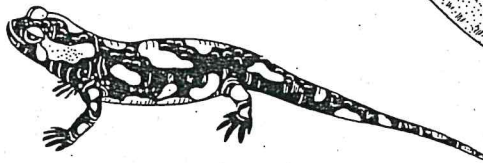
\_\_\_\_\_



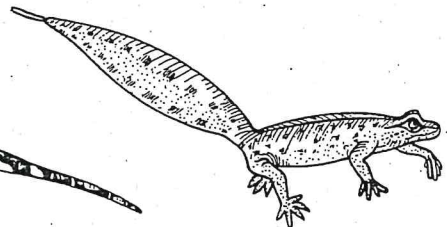
\_\_\_\_\_



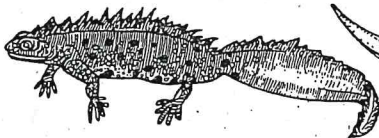
\_\_\_\_\_



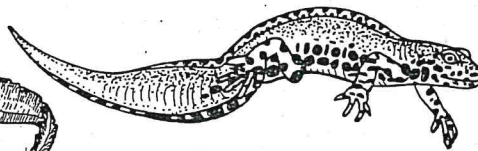
\_\_\_\_\_



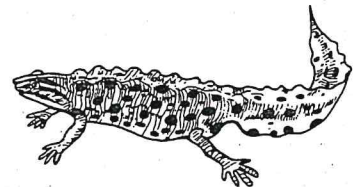
\_\_\_\_\_



\_\_\_\_\_



\_\_\_\_\_



\_\_\_\_\_